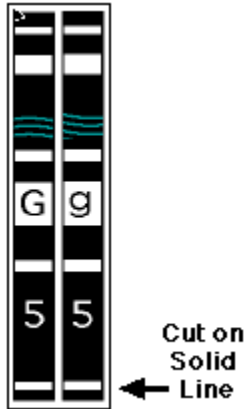


Follow directions carefully: cut on solid lines, fold on dotted lines

Cutting Out the Chromosomes

Step #1

Cut out each pair of chromosomes on the solid line that surrounds each pair.



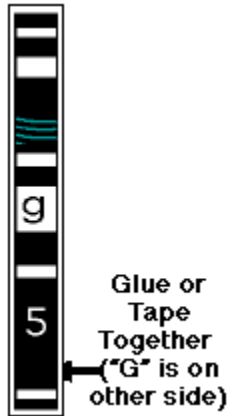
Step #2

Fold along the dotted line between the pair of chromosomes.



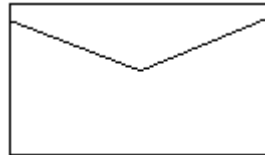
Step #3

Glue/tape the folded pair together, press until they are perfectly flat. Watch for wet glue squeezing out from between the chromosomes; they may stick with other chromosomes!




Step #4

Store chromosomes in an envelope or zip lock bag to keep chromosomes flat.



Genotype to Phenotype Simulation Booklet



Photos: Mrs. King's Grandsons

Combining germ cells to create a new baby human

Name: _____ Period: _____

Lesson modified from Woodrow.org

Print 2 sided (color) and it will fold into a booklet.

Making A Face: Genetic Simulation *Assessment*

Grading Rubric

Item	Pts. Possible	Pts. Earned
Data Sheets <ul style="list-style-type: none"> • Completely filled out and neat 	10	
Analysis Questions <ul style="list-style-type: none"> • Complete and accurate 	12	
Drawing of Face <ul style="list-style-type: none"> • Neatly drawn • Use color to show correct pigments; eyes, hair, skin 	10	
INB Summary <ul style="list-style-type: none"> • Write a short summary of what you learned- give specific examples 	2	
Total	34	

Teacher comments:

11. After looking at the pictures of all the “children” in your class, how is there so much variation in the way they look if they come from the same parents? _____

12. Explain why people that had the genotype "II" had to skip the rest of the chin characteristics. _____

7. What does *epistasis* mean? Explain and give an example. _____


8. Hair color is polygenic. What does this mean? _____

9. How is it that there are so many colors of skin? _____

10. This exercise was a simulation. How close to real human genetics do you think this was, and why? _____

Making A Face: A Genetic Simulation

Converting Genotype Into Phenotype by Simulating Meiosis and Fertilization



Congratulations, you are going to simulate creating a baby!

After this simulation, you should be able to answer the following questions:

- ❖ How many chromosome pairs does each human parent have?
- ❖ How many chromosomes does each parent "donate" to the next generation?
- ❖ Are some genes and gene characteristics expressed over others.... are dominant and recessive genes responsible for how a baby looks?
- ❖ What is the difference between *Genotype* and *Phenotype*?
- ❖ Do some traits require more than one gene to be fully expressed?
- ❖ What are sex-linked traits?
- ❖ What causes so much variation in the way children look even if they come from the same parents?
- ❖ What is epistasis?
- ❖ What is a polygenic inheritance?

You have been given a pink set of chromosomes if you are going to represent the mother, and a blue set of chromosomes if you are going to represent the father. We are asking the question... What would your baby look like if both

parents (you and your classmate) have one dominant gene and one recessive gene for each of the facial features illustrated on the following pages? This, of course, is not the way it really is, but this is a simulation. Each of you will be heterozygous (hybrid) for each trait.

To determine the facial appearance of your child, you and your spouse will drop your 23 pair of chromosomes to the table to simulate germ cell formation. This "dropping your chromosomes" will determine which one of the pair of chromosomes will enter the successful germ cell. Each parent, mom and dad, donates one of each of their 23 pairs of chromosomes. Therefore, they each donate 23 chromosomes. Since genes are located in the DNA of the chromosomes, each child will end up with a pair of genes for each trait, one from the dad and one from the mom.

After you drop your own chromosomes on the table and line them up according to size/number, you will pair with your partner by pushing the chromosomes one at a time toward one another until they are side by side. This represents the establishment of pairs of chromosomes. When you are done you should have twenty three pairs of chromosomes again. The mathematics of sexual reproduction is..... **one** of each chromosome from the mother.....**Plus.... one** of each chromosome from the father equals a pair of each chromosomes for the baby!

Genotype= letters/genes Phenotype= characteristic/what you see

Record the genetic contributions from each parent on the chart provided and record in your INB. Translate the genetic information into the phenotypic information (what will your baby look like). A mother and father will produce one child only. Then, each student will produce a drawing of his or her child 15 years later when he or she is in high school! Write your own name only on the back of your drawing -- we want to see if we can match the mother's and father's drawings of their children. Don't collaborate with your partner on the drawing assignment. In addition, answer the questions on the Question sheet.

Making A Face: Genetic Simulation Questions

1. Why did you cut out the chromosomes in pairs? _____

2. When you folded the pair of chromosome and dropped them, what did that represent? _____

3. What is the significance of only one of the pair of chromosomes ending its random journey facing up? _____

4. What does this have to do with sex cell formation? _____

5. When you and your partner pushed the like pairs of chromosomes together, what was the number of chromosomes before and after you pushed them together? _____

6. What is it called when two genes are in a cell and one gene's phenotype is expressed and one is not? Explain and give an example of when this happened. _____

Eyelashes	Long MM	Long Mm	Short mm
Mouth Size	Wide QQ	Average Qq	Narrow qq
Lips: Thickness	Thick JJ	Thick Jj	Thin jj
Dimples	Dimples KK	Dimples Kk	Absent kk
Nose Size	Big NN	Medium Nn	Small nn
Nose Shape	Rounded UU	Rounded Uu	Pointed uu
Earlobe Attachment	Free ZZ	Free Zz	Attached zz
Hairy Ears	Present DD	Present Dd	Absent dd
Freckles on Cheeks	Present \$\$	Present \$s	Absent ss
Freckles on Forehead	Present @@	Present @@	Absent @@

Instructions

1. Making the Chromosome Models

Follow the instructions to make the cut-out, folded chromosome models. Note that the two sides of each “chromosome” are different – each side carries a different version (allele) of each gene for this simulation.

2. Meiosis: Creating the Germ Cells

Hold your set of chromosomes high in the air above your head. Drop them one at a time to the floor. If they don't twirl then drop them again. When they have all dropped to the floor carefully pick them up without turning them over and find a lab table where you can face each other, then organize them according to size. Your teacher will demonstrate how they should line up. Equal sizes should be across from each other as you face your partner. The sex chromosomes should be organized separately from the 22 other (autosomal) chromosomes. Keep in mind that you begin this exercise with the chromosome pair above your head, dropping them so that they twirl down to the floor and finally land. Only one of each chromosomal pair faces up. The upward facing one of the pair represents the chromosome that ended up in the successful germ cell that you have just produced. Yes, those 23 chromosomes that are all neatly lined up represent the contents your sperm or egg.

3. Fertilization

Gently push the like-sized chromosomes toward each other at point halfway between you, pairing them up according to size and number. This represents the moment when a new human potential is reached. A totally unique human is conceived!

4. Determination of Characteristics

Determination of child's sex. After conception, parents are always interested in determining the sex of their child. In this case the "father" has pushed either an "X" chromosome or a "Y" chromosome toward the middle (which ever dropped facing up) and matched it with the "mother's" "X" chromosome. If an "X", then you have a beautiful little girl, if a "Y", then a beautiful little boy! Record the information on your data sheet.

Determination of various genotypes. Carefully read the genes on all of the chromosomes and circle the resulting genotypes and phenotypes on your data sheet. These are the genes that make up the new baby's genotype.

5. Envisioning the New Person

Time passes, you get older, your baby is growing up! What does your child look like when he or she is a teenager of about 15 years of age? Make a full page, color drawing of your teenager's face using your best drawing ability. Color is necessary; some of the genes produce pigment!

6. Understanding the Process of Heredity

Answer the questions about the traits of "your" child on the question sheet. Use the descriptions of the genes and chromosomes to help you with your answers.

Eye Color	Dark Brown FFBB	Brown FFBb	Brown FfBb	Brown FfBB	Dark Blue FfBb	Dark Blue Ffbb	Light Blue ffBB
	Light Blue FfBb	Blue	Pale Blue ffbb				
Red Hair		Red Pigment GG		Less Red Pigment Gg		No Red Pigment gg	
Hair Type		Curly WW		Wavy Ww		Straight ww	
Widow's Peak		Present PP		Present Pp		Absent pp	
Eyebrow Thickness		Thick TT	Thick Tt	Thin tt			
Eyebrow Placement		Apart EE	Apart Ee	Touching in Middle ee			
Eye Distance Apart		Close OO	Less Close Oo		Far Apart oo		
Eye Size		Large II	Medium Ii		Small ii		
Eye Shape		Almond VV		Almond Vv		Round vv	

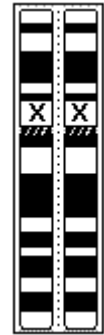

Making A Face: Genetic Simulation

Data Sheet

<u>Trait</u>	<u>Phenotype/ Genotype</u>		<i>Record your genotypes and phenotypes</i>						
Gender	Female XX	Male XY							
Face Shape	Round RR	Round Rr	Round	Square					
Chin Shape	Very Prominent LL	Very Prom. Ll	Very Prom.	Not Prom.					
Chin Shape If LL or Ll only	Round SS	Round Ss	Round	Square					
Cleft Chin If LL or Ll only	Cleft CC	Cleft Cc	Cleft	No Cleft					
Skin Color Polygenic	Very, Very Dark Brown AAA AAA	Very Dark Brown AAA AA/a	Dark Brown AAA A/aa	Med. Brown AAA /aaa	Light Brown AA /aaaa	Light Light Brown A/a aaaa	Very Very Light Brown aaa aaa		
Hair Color Polygenic	Black Dark	Very Brown	Dark Brown	Brown	Light Blond	Honey Blond	Blond		
	HHHH HHHH	HHHH HHH/h	HHHH HH/hh	HHHH H/hhh	HHHH/HHH/h hhhh	HH/h hhhh	HH/h hhhhh		
	Very Light Blond H/hh hhhhh	VERY light! Platinum hhh hhh							

Gender Determination

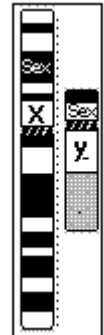
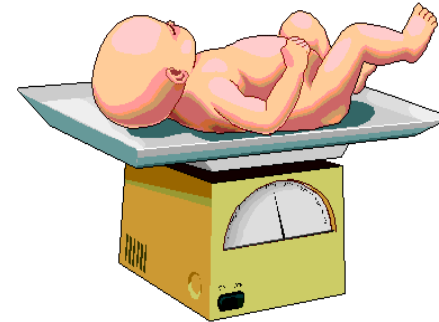
If your dropping of the genes resulted in two "XX" chromosomes turning face up, then you are the very lucky parents of a little girl.



It's a Girl!

The Mom contributed one "X" and the Dad the other "X".

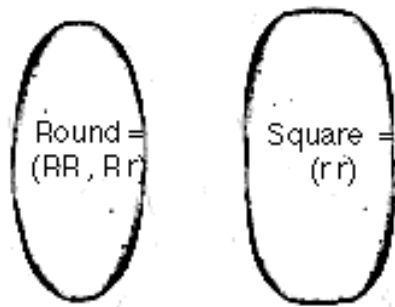
If your dropping of the genes resulted in an "XY" combination of chromosomes turning face up, then you are the very lucky parents of a little boy.



It's a Boy!

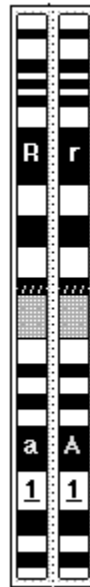
The Mom contributed one "X" and the Dad one "Y" chromosome.

Face and Chin Determination



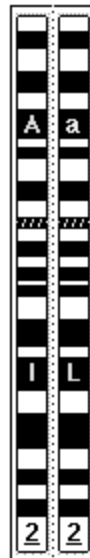
#1 Face Shape

Chromosome #1 contains the genetic information in a gene we will call "R". This information determines the general shape of the face. Place your baby's genotype for face shape in the data table.

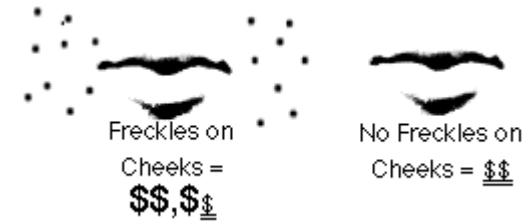


#2 Chin Shape

Chromosome #2 contains the chin shape gene "L." The genotype "ll" prevents the expression of the next two pairs of genes. Place your baby's genotype for chin shape in the data table. The control of one set of genes by another is called *epistasis*. If you landed the genotype "ll" then skip the next two and start on Skin Color.



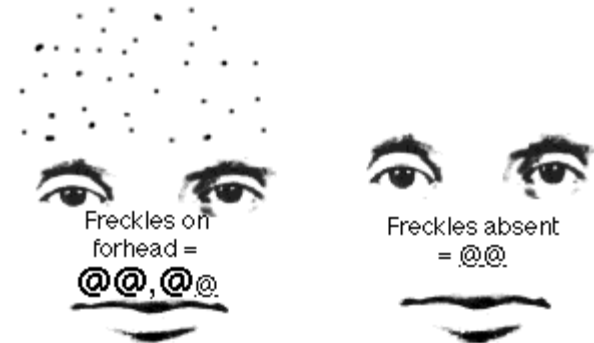
Freckle Determination



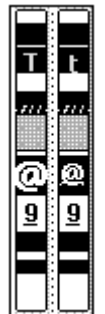
Chromosome #21 contains a gene, "\$" which causes uneven pigment to form in the cheek region. If "\$" is present then your child will have cheek freckles.



Place your baby's genotype for freckles in the data table.



Finally on chromosome #9 there is data in the form of a gene "@". If your baby has "@@" there will be freckles on the forehead! ("@@" underlined, represent the recessive genes)



Place your baby's genotype for freckles in the data table.

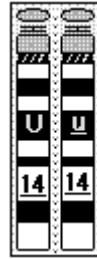
Nose and Ear Shape Determination



Nose Shape
Rounded =
(UU, Uu)



Nose Shape
Pointed =
(uu)



Place your baby's genotype for nose shape in the data table

Your baby's nose shape is determined by a gene on chromosome #14. The allele "U" imparts a rounded shape to the nose.



Lobed
Ears = ZZ, Zz



Attached
Ears = zz

Chromosome #22 carries the gene for free ears. The gene "Z" causes the earlobe to hang free at the side of the head.

Place your baby's genotype for earlobe attachment in the data table.



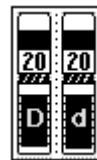
Hairy Ears
Present =
(DD, Dd)



Hairy Ears
Absent =
(dd)

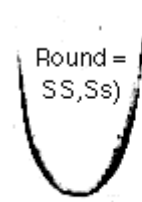
Chromosome #20 contains DNA information encoded in a gene called "D". This information, if in its dominant form, causes the ear to grow a large amount of fuzzy hair.

Place your baby's genotype for hairy ears in the data table.

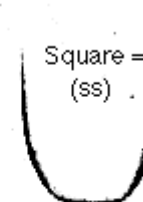


(18)

Chin Shape Determination



Round =
SS, Ss



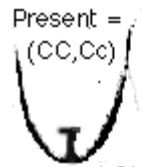
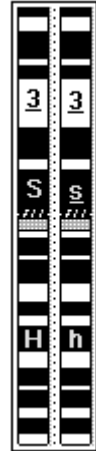
Square =
(ss)

Chin
Shape

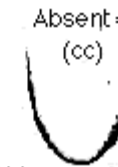
Chromosome #3 contains the "S" gene. This gene controls the shape of the chin, round or square. These genes are activated only if the dominant "L" on chromosome #2 is present.

Place your baby's genotype for chin shape in the data table.

The control of one set of genes by another is called *epistasis*.



Present =
(CC, Cc)



Absent =
(cc)

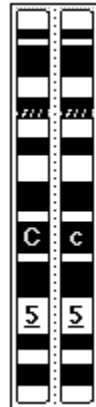
Cleft Chin

Chromosome #5 carries the "C" gene. The "C" gene controls the development of the cleft chin phenotype.

Remember these "C" genes are activated only if the dominant "L" on chromosome #2 is present.

Place your baby's genotype for chin shape in the data table.

The control of one set of genes by another is called *epistasis*.

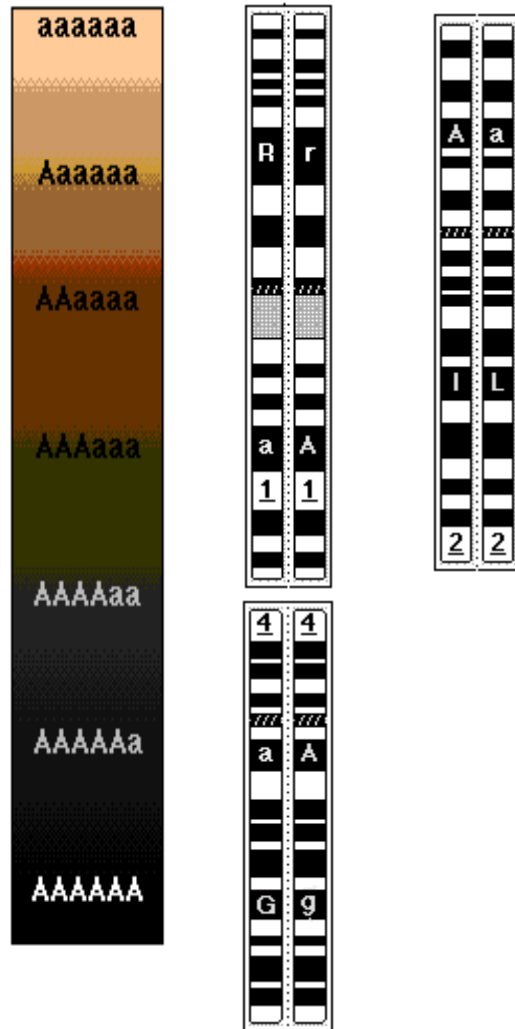


(7)

Skin Color Determination

Skin color is determined by three sets of genes on chromosomes #'s 1, 2, and 4. Since this trait is determined by several genes, it is known as **polygenic inheritance**. The dominant genetic code, gene "A" translates into a protein called melanin. This dark pigment is like a natural UV blocker. The greater the number of dominant genes one has, the greater the amount of **melanin**, the darker the skin, and the more UV protection a person has. These genes have been selected-for near the Earth's equator where the intense UV photons can cause a great deal of damage to lighter skin.

Count up the number of dominant and recessive genes and place your baby's genotype for skin color in the data table.



(8)

Dimples and Nose Determination

Dimple appears here when offspring smiles →



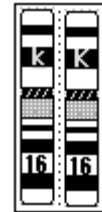
Dimples =
KK, Kk



No Dimples =
kk

Chromosome #16 contains genetic information regarding the construction of dimples.

Place your baby's genotype for dimples in the data table.



Nose Size
Big =
(NN)



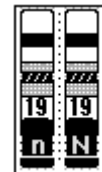
Nose Size
Average =
(Nn)



Nose Size
Small =
(nn)

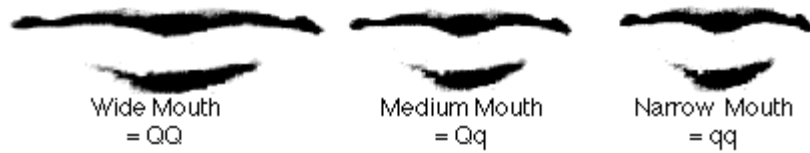
Chromosome #19 contains genetic information regarding the construction of nose size

Place your baby's genotype for nose size in the data table.




(17)

Mouth Size & Shape Determination



Chromosome #17's "Q" gene controls the width of the mouth. The dominant gene imparts width.

Place your baby's genotype for mouth width in the data table.



Chromosome #18's gene "J" adjusts the thickness of the lips.

Place your baby's genotype for fullness of lips in the data table.

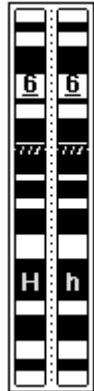
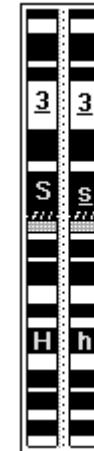


Hair Color Determination

The hair color gene, like skin color, is *polygenic*. The same genetic code is found on chromosome #'s 3, 6, 10 and 18. This code translates into pigment which is incorporated into the hair as it is growing. The greater the number of dominant alleles, the darker the hair. Hair color varies from black to white.



Count up the number of dominant and recessive genes and place your baby's genotype for hair color in the data table.



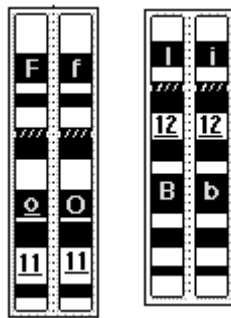
Eye Color Determination

Chromosomes #'s 11 and 12 contain Eye Color Genes: Darker eyes are produced in the presence of more active alleles. In this situation, the Capital letters (F or B) represent alleles which are active in depositing dark pigment. Lower case letters (f or b) represent alleles which deposit little pigment. To determine the color of the eyes, assume there are two gene pairs involved, one of which codes for depositing pigment in the front of the iris, and the other codes for depositing pigment in the back of the iris.

Determine the genotype of the first pair (FF,Ff,ff). and then the second (BB,Bb,bb). If your genotype is in the first column then check your eye color in the second column.

Column #1	Column #2
Genotypes	Protein Phenotypes
FFBB	Dark brown
FFBb	Brown
Ffbb	Brown
FfBB	Brown
FfBb	Dark Blue
Ffbb	Dark Blue
ffBB	Light Blue
ffBb	Light Blue
ffbb	Pale blue

Place your baby's genotype for eye color in the data table.

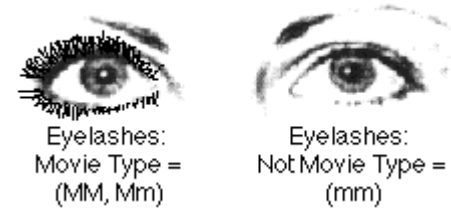
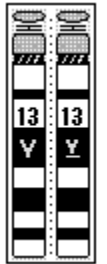


Eye Shape and Lash Determination




Chromosome #13 has the eye shape gene "V." Dominant genes code for almond shape and homozygous recessive is round.

Place your baby's genotype for eye shape in the data table.

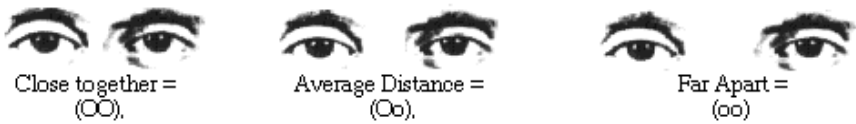


Movie star eyelashes are found on chromosome #15. Dominant "M" genes place your kid on the way to stardom!

Place your baby's genotype for eyelashes in the data table.

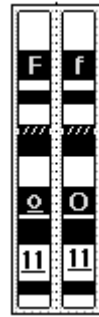


Eye Spacing & Measurement Determination



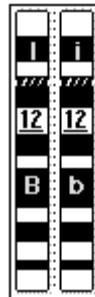
Chromosome #11 has the gene for eye placement. The dominant gene places the eyes close together, the recessive, far apart.

Place your "baby's" genotype for eye placement in the data table.



Chromosome #12, beside carrying one of the pigment genes for eye color, also carries the gene "I" for eye size.

Place your "baby's" genotype for eye size in the data table.



Red Hair Determination

Red Hair: Red hair is another gene for hair color present on a different chromosome. It blends its effect with other hair colors. Redness of the hair seems to be caused by a single gene pair with two alleles, red (G) or no red (g), and displays incomplete dominance. Thus, if a person has two genes for red (GG), the hair will be a more intense red than if they have a single gene (Gg). If a person has no genes for red (gg), then the hair does not show as red at all. Red hair is complicated by the fact that dark pigment, controlled by the many hair color genes, may mask or hide the red color. The darker the brown, the less the red shows through, although more shows with (GG) than with (Gg). As the hair becomes lighter in color, more red shows through. If your child is blond as evidenced by 3 Capitals or less above and (GG) lands facing up, then your child will probably have flaming red hair. Auburn might be (Gg) with the lighter shades of pigmentation.



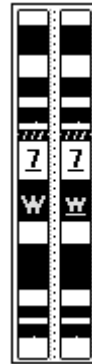
GG = Heavy Red Pigment
 Gg = Medium Red Pigment
 rr = No Red Pigment




Hair Type Determination



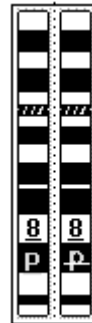
Chromosome #7 contains the genetic code for hair type. The "W" hair-making DNA codes for amino acids which contain a sulfur atom which causes cross links between amino acids in the hair..... thus curly hair! Straight hair lacks the many sulfur amino acids and does not make as many cross links.



Place your baby's genotype for hair type in the data table.



Chromosome #8 contains the genetic code for Widow's Peak. If your baby has a dominant "P" then he or she will possess that trait. (Notice that there is a line through the recessive small "p" on the paper chromosome.)



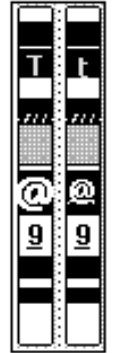
Place your baby's genotype for Widow's Peak in the data table.

Eyebrow Shape Determination



Chromosome #9 carries a gene for eyebrow thickness called "T". It works with complete dominance.

Place your baby's genotype for eyebrows in the data table.



Chromosome #10 has the gene for eyebrow placement. "E" separates and lack of "E" causes connected eyebrows.

Place your baby's genotype for eyebrow placement in the data table.

